


Drawing Clock Hands

Name: _____


Draw the hands of the clocks to match the times.

1



1:00

2



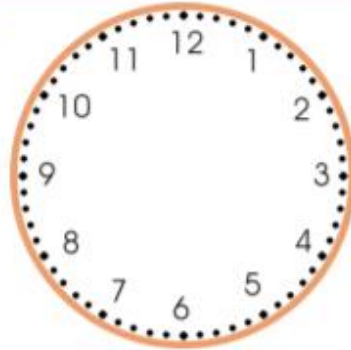
11:00

3



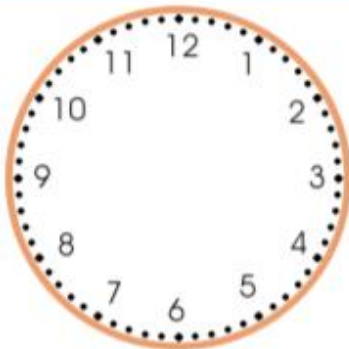
5 : 00

4



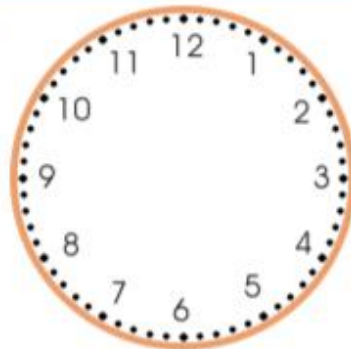
7 : 00

5



4:00

6



12:00

1



1:30

2



3:30

3



5:30

4



9:00

5



7:30

6



12:00