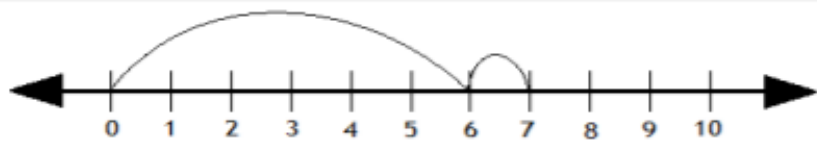


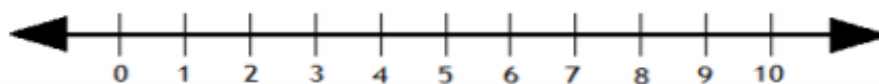
Solve the following by drawing hops on the number line.

Example:



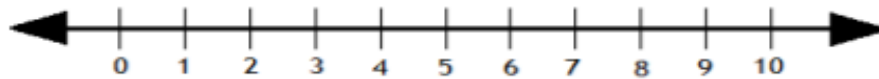
$6 + 1 = \boxed{7}$

1.



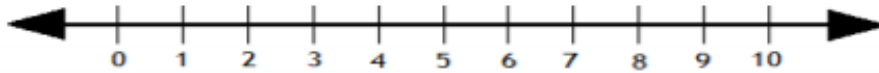
$3 + 1 =$

2.



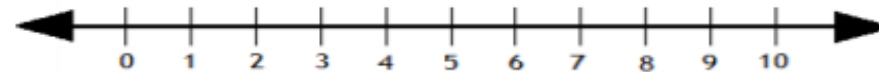
$4 + 3 =$

3.



$6 + 2 =$

4.



$7 + 2 =$